


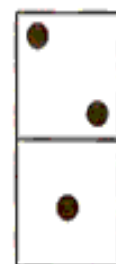


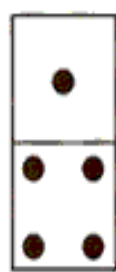





1) OBSERVE AS PEÇAS DO DOMINÓ E REGISTRE OS FATOS EM CADA QUADRO, CONFORME O MODELO.

FORMA VERTICAL

| | | | | | | | | |
|---|---|---|---|---|---|---|---|---|
|  | $\begin{array}{r} 5 \\ + 0 \\ \hline 5 \end{array}$ |  | + |  | + |  | + |  |
|---|---|---|---|---|---|---|---|---|

| | | | | | | | | |
|--|---|--|---|--|---|--|---|--|
|  | + |  | + |  | + |  | + |  |
|--|---|--|---|--|---|--|---|--|

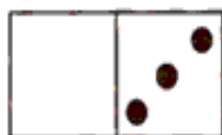
FORMA HORIZONTAL



$$2 + 2 = 4$$



$$\dots + \dots = \dots$$



$$\dots + \dots = \dots$$



$$\dots + \dots = \dots$$



$$\dots + \dots = \dots$$