




# CORONAVÍRUS

## LAVANDO CORRETAMENTE AS MÃOS COM ÁGUA E SABÃO

 40 a 60 segundos



Molhe as mãos  
com água.



Aplique sabão  
líquido.




Esfregue bem as  
mãos.



Esfregue entre  
os dedos



Lave dedo por  
dedo e o polegar



Esfregue o dorço  
dos dedos.



Esfregue as  
pontas dos  
dedos



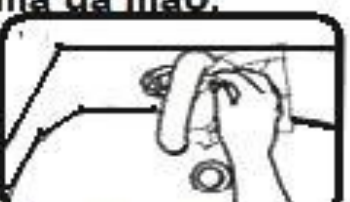
Limpe as unhas es-  
fregando-as na pal-  
ma da mão.



Retire todo o  
sabão com água  
corrente.



Use toalhas  
descartáveis

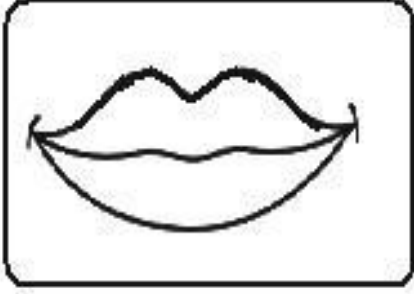


Use papel para  
fechar a torneira



Suas mãos estão  
limpas.

6- FORME FRASES COM:



Four horizontal lines for writing, contained within a rounded rectangular frame.



Four horizontal lines for writing, contained within a rounded rectangular frame.





Four horizontal lines for writing, contained within a rounded rectangular frame.





Four horizontal lines for writing, contained within a rounded rectangular frame.


Resolva as adições:



$$\begin{array}{r} 12 \\ + 15 \\ \hline \end{array}$$



$$\begin{array}{r} 22 \\ + 12 \\ \hline \end{array}$$



$$\begin{array}{r} 46 \\ + 11 \\ \hline \end{array}$$



$$\begin{array}{r} 23 \\ + 42 \\ \hline \end{array}$$



$$\begin{array}{r} 32 \\ + 10 \\ \hline \end{array}$$



$$\begin{array}{r} 34 \\ + 12 \\ \hline \end{array}$$



$$\begin{array}{r} 12 \\ + 12 \\ \hline \end{array}$$


$$\begin{array}{r} 25 \\ + 20 \\ \hline \end{array}$$


$$\begin{array}{r} 16 \\ + 12 \\ \hline \end{array}$$


$$\begin{array}{r} 51 \\ + 16 \\ \hline \end{array}$$


$$\begin{array}{r} 64 \\ + 11 \\ \hline \end{array}$$


$$\begin{array}{r} 72 \\ + 12 \\ \hline \end{array}$$

ESCOLA: \_\_\_\_\_

TURMA: \_\_\_\_\_ DATA: \_\_\_\_ / \_\_\_\_ / \_\_\_\_
















ALUNO: \_\_\_\_\_

# Qual é o numeral ?

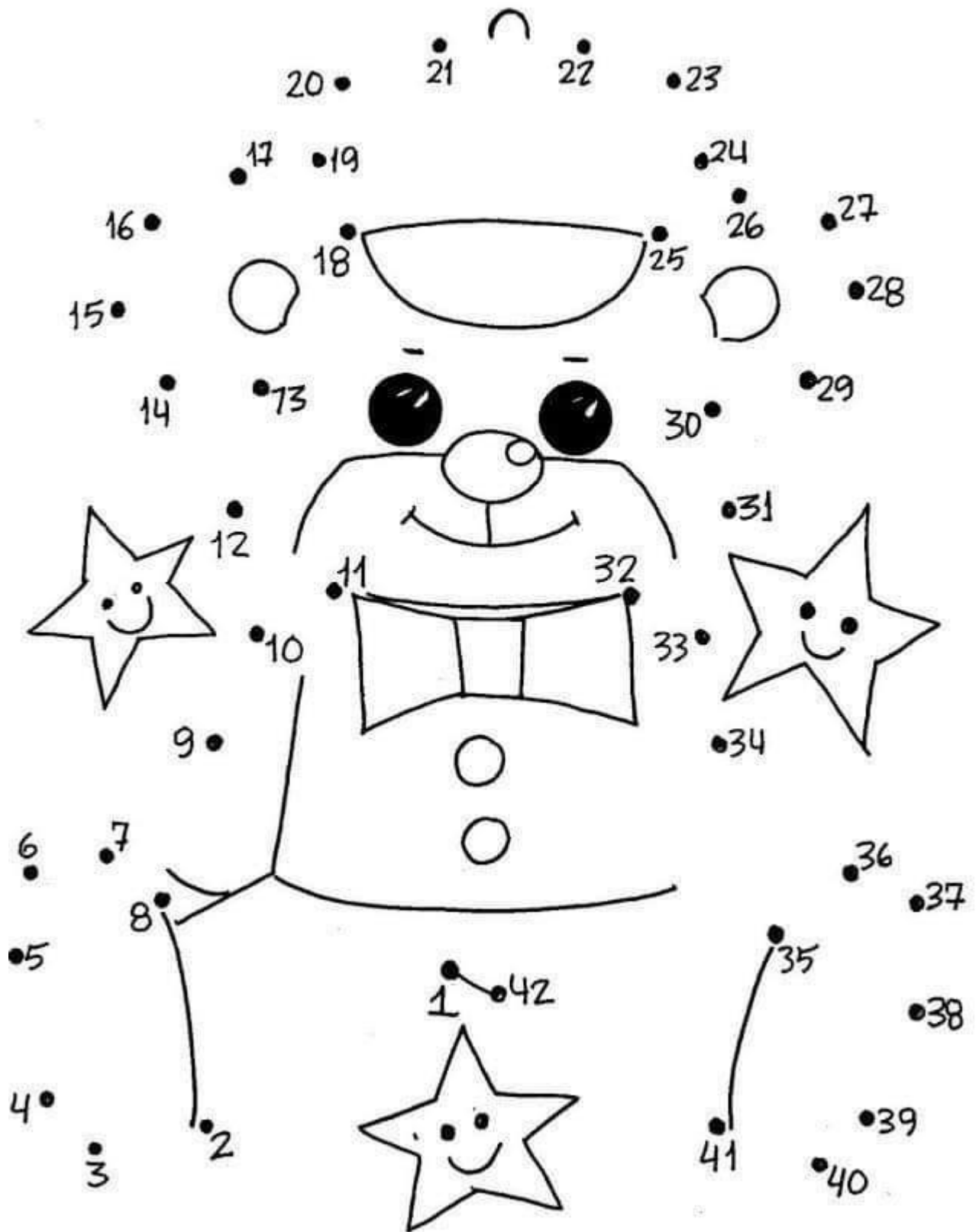
1- Descubra qual é o numeral escondido atrás do desenho.

1		3	4	5		7	8	9	
11	12		14	15	16		18		20
	22	23		25	26	27		29	30
31		33	34		36	37	38	39	
	42	43		45	46	47	48		50

2- Escreva o numeral correspondente no quadro ao lado.

	→	<input type="text"/>		→	<input type="text"/>		→	<input type="text"/>
	→	<input type="text"/>		→	<input type="text"/>		→	<input type="text"/>
	→	<input type="text"/>		→	<input type="text"/>		→	<input type="text"/>
	→	<input type="text"/>		→	<input type="text"/>		→	<input type="text"/>
	→	<input type="text"/>		→	<input type="text"/>		→	<input type="text"/>

☺ **LIGAR DE 1 A 42.** ✎







# LIGA-NÚMEROS



COMPLETE A ORDEM NUMÉRICA.



0	1	2	3	4	5	6	7	8	9
10									
20									
30									
40									
50									
60									
70									
80									
90									


NOME: \_\_\_\_\_ DATA: \_\_\_\_/\_\_\_\_/\_\_\_\_

ESCOLA: \_\_\_\_\_

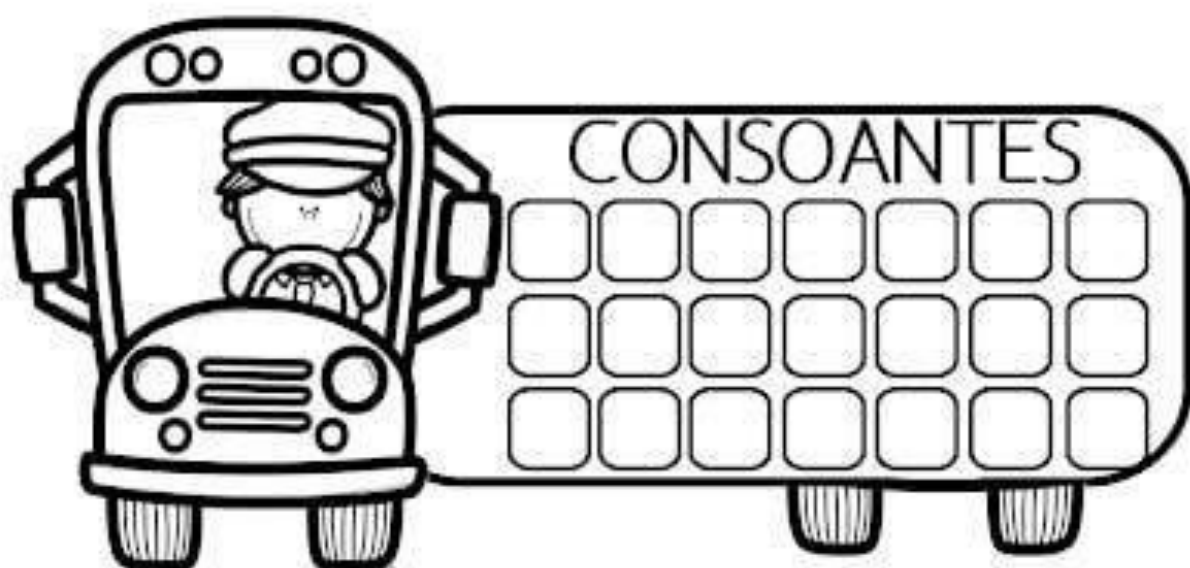
TURMA: \_\_\_\_\_ DATA: \_\_\_\_ / \_\_\_\_ / \_\_\_\_

ALUNO: \_\_\_\_\_

1-OBSERVE O ALFABETO E SEPRE AS VOGAIS DAS CONSOANTES, ESCREVENDO NOS LUGARES CORRESPONDENTES.



A B C D E F G H I J K L M  
N O P Q R S T U V W X Y Z






NOME:

DATA: / /

## PROBLEMINHAS

NUMA FAZENDA HAVIA 8 VAQUINHAS E 3 BOIS. QUANTOS ANIMAIS A FAZENDA TINHA NO TOTAL?



O AQUÁRIO DE ALICE POSSUI 5 PEIXINHOS DOURADOS E 4 PEIXES PALHAÇO. QUANTOS PEIXES NO TOTAL ALICE TEM?



PEDRO TEM 7 CARRINHOS E FÁBIO TEM 6. JUNTOS ELES TEM QUANTOS CARRINHOS?



LARA COMPROU UMA BONECA DE 9 REAIS E UMA BOLA QUE CUSTOU 5 REAIS. QUANTO ELA GASTOU?

